
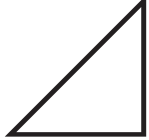













Sunday	Monday	Tuesday	Wednesday	Thursday	Friday	Saturday
						1 How many Saturdays are in October?
<p>Jessie's birthday. 2 cake has 3 more candles than this one. How old is Jessie?</p> 	<p>Name the shape 3 below.</p> 	<p>Write the numbers 4 that are between 0 and 15.</p>	<p>Amy found a coin 5 on the playground. It looked like this. What is this coin?</p> 	<p>Clap your hands 6 5 times. Jump up and down 3 times. Stomp your feet 2 times. Can you make this in to a pattern?</p> 	<p>What is missing? 7</p> 	<p>Draw a picture 8 using only triangles.</p>
<p>Name two 9 shapes that have four sides and four corners?</p>	<p>Find three 10 objects in your home that are rectangles.</p>	<p>Is the cat above 11 or below the ball?</p> 	<p>How many bears 12 do you see?</p> 	<p>What is one 13 difference between a square and a hexagon?</p>	<p>Draw enough 14 squares to match your age.</p>	<p>How many days 15 are in each week? Name them all.</p>
<p>Draw six 16 pumpkins.</p>	<p>Find a cube in 17 your home. What did you find?</p>	<p>Mike has 8 pieces 18 of candy. Mark has 10 pieces of candy. Who has more?</p>	<p>Name this coin. 19 What is its value?</p> 	<p>Niki is 6 years 20 old. Alex is 8 years old. Who is older?</p>	<p>Six scarecrows 21 are in my yard. Three have hats. How many don't have hats?</p> 	<p>Jim has 4 22 friends playing in his yard. If 2 of the friends go next door to play, how many friends will be at Jim's?</p>
<p>Sam wants to 23 give each of his friends a balloon. He has five friends and seven balloons. Will he have enough balloons for his friends?</p>	<p>Draw 8 circles. 24</p>	<p>Complete the 25 the pattern.</p> 	<p>Name the 26 coin that is worth 25 cents.</p>	<p>Ella carved 3 27 pumpkins and her dad carved 1. How many jack-o-lanterns did they make?</p> 	<p>Which season 28 is it today? Which season comes next?</p>	<p>Draw a circle 29 beside a rectangle.</p>
<p>Write the 30 numbers 1-15</p>	<p>Count aloud to 31 50.</p>					