







Sunday	Monday	Tuesday	Wednesday	Thursday	Friday	Saturday
<p>1 Which is longer? a ruler or your pants</p>	<p>2 Draw a picture using only squares.</p>	<p>3 Are there fewer mittens or snowflakes?</p> 	<p>4 Continue the pattern A, B, C, A, B, __</p>	<p>5 Which word has more letters? Snow or cat</p> 	<p>6 Name something in your house that is a cube.</p>	<p>7 How many small snowmen are on this page?</p>
<p>8 Jerry has 3 crayons. He needs 5 more to fill his box. How many crayons will his box hold?</p>	<p>9 Which birthday comes before your 6th birthday?</p>	<p>10 How many smiley faces do you see?</p> 	<p>11 Are there more snowmen or smiley faces on this calendar?</p>	<p>12 Is the triangle 1st, 2nd, or 3rd in line?</p> 	<p>13 Name 2 things you do in the morning and 2 things you do at night.</p>	<p>14 How many snowmen are at the bottom of the page?</p>
<p>15 Rose has six snowballs. Ted has four snowballs. Draw a picture that shows how many snowballs they have all together.</p>	<p>16 Chandler's birthday is on January 24th. What day of the week is that?</p>	<p>17 Name the months of the year. How many months are in one year?</p>	<p>18 Draw a picture that shows $1 + 3$. Draw a picture that shows $2 + 2$. Do they have an equal amount?</p>	<p>19 Shane was second in line. Blake was behind him. Where was Blake in line? Third or Fourth</p>	<p>20 Anna's favorite day of the week is Sunday. What day comes just before her favorite day?</p>	<p>21 Nita has 4 red bows and 2 pink bows. How many does she have all together?</p> 
<p>22 Do you eat breakfast before or after lunch</p>	<p>23 Draw five triangles.</p>	<p>24 Write the word for 4.</p>	<p>25 What is the pattern of the snowmen?</p>	<p>26 Count out loud to 50.</p>	<p>27 Write your favorite number word.</p>	<p>28 Which shape is missing?</p> 
<p>29 Do you have more sinks or people in your home?</p>	<p>30 Jason has 2 brothers and 1 sister in his family. How many children are in his family?</p>	<p>31 Name the number that comes after 8 and before 10.</p>	