




Sunday	Monday	Tuesday	Wednesday	Thursday	Friday	Saturday
					1 Make a repeating pattern that has snowballs and squares.	2 Which number comes between 4 and 6?
3 Which is longer? a ruler or your pants	4 Draw a picture that shows three triangles.	5 Are there fewer mittens or snowflakes? 	6 Continue the pattern A, B, C, A, B, ___	7 Cat Snow Which word has a greater number of letters?	8 It is January. What was last month? What month comes next?	9 Jump up and down ten times.
10 Jerry has 3 crayons. He needs 5 more to fill his box. How many crayons will his box hold?	11 Which birthday comes before your 6 <sup>th</sup> birthday?	12 How many smiley faces are there? 	13 Are there more snowmen or smiley faces on this calendar?	14 Is the triangle 1 <sup>st</sup> , 2 <sup>nd</sup> , or 3 <sup>rd</sup> in line? 	15 Tell 2 things you do in the morning and 2 things you do at night.	16 How many snowmen are at the bottom of the page?
17 Lily's party is on Friday. We are meeting to play on the day after her party. What day are we playing?	18 Chandler's birthday is on January 24 <sup>th</sup> . What day of the week is that?	19 Name the days of the week. How many days are in one week?	20 Draw a picture that shows 1 + 3. Draw a picture that shows 2+2. Do they have an equal amount?	21 Draw a picture with five of your favorite shape.	22 Emma's favorite day of the week is Sunday. What day comes just before her favorite day?	23 Nita has 4 red bows and 2 pink bows. How many does she have all together?
24 Do you eat breakfast before or after lunch?	25 Is it summer or winter? How do you know?	26 Write the word for 4.	27 What is the pattern of the snowmen?	28 Count out loud to 50.	29 Write your favorite number word.	30 What shape is missing? 