










KINDERGARTEN



FEBRUARY 2012



Sunday	Monday	Tuesday	Wednesday	Thursday	Friday	Saturday
			1 Count the number of spoons in your kitchen drawer. Write that number.	2 Name two shapes that have four sides.	3 Does the sun rise in the evening or the morning? 	4 Draw eight triangles.
5 How many bears are there? 	6 Today is Monday. What was yesterday? What day is tomorrow?	7 $3 + 7 = 10$ What are two other numbers you can add together to equal 10?	8 Kay wants to buy a piece of candy that costs 8 cents. How many pennies does she need to buy the candy?	9 Name two things in your house that are square shaped.	10 Which is heavier? A dog or a pencil A horse or a cat	11 Matt's sister is in 7 th grade. He is in the grade before her. What grade is Matt in?
12 May wants to make Valentine's Day cards for her friends. She has 4 friends who are boys and 6 friends who are girls. How many cards does she need to make?	13 How many blocks do I have? 	14 Is a basketball a cube or a sphere? 	15 Circle the bear that is fourth in line. 	16 How many days are in a week? Name the days of the week.	17 Nick was in line behind Jade. Jade is third in line. Where is Nick in line?	18 How much money is this? 
19 Write the numbers 1 -15	20 Skip until you have counted to 20.	21 Draw five of anything you like.	22 What is the season today?	23 Write the number word that equals the number of letters in your last name	24 Name two things (not people) in your house that are taller than you.	25 Rose has 4 flowers that are pink and 3 flowers that are white. How many flowers does she have?
26 Count out loud from 1 to 50.	27 SMILE!!!	28 Draw six hearts.	29 I have 15 cents. What coins could I have?			